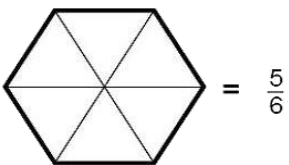
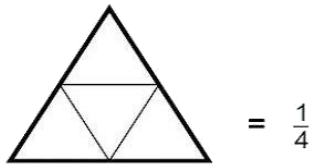
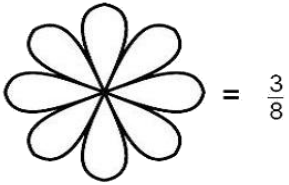
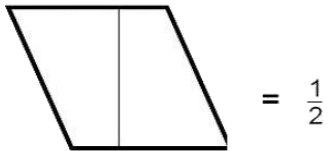
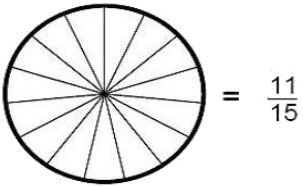
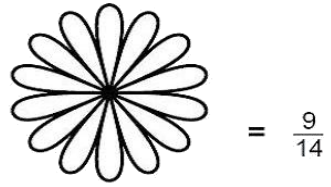
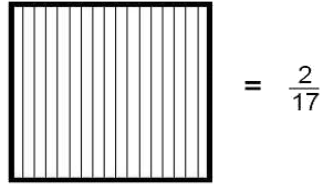
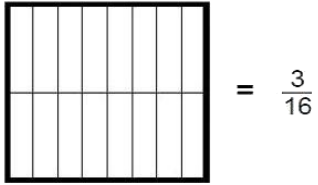
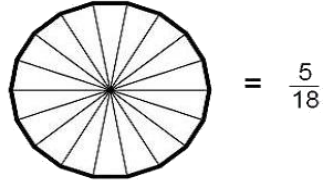
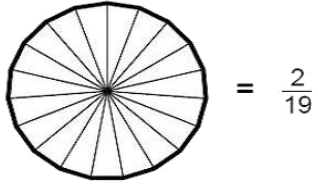
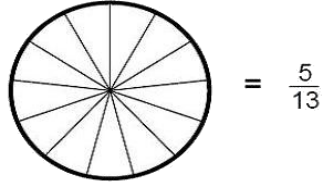
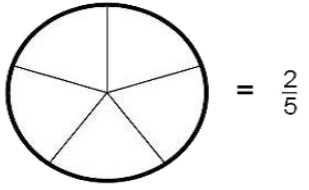
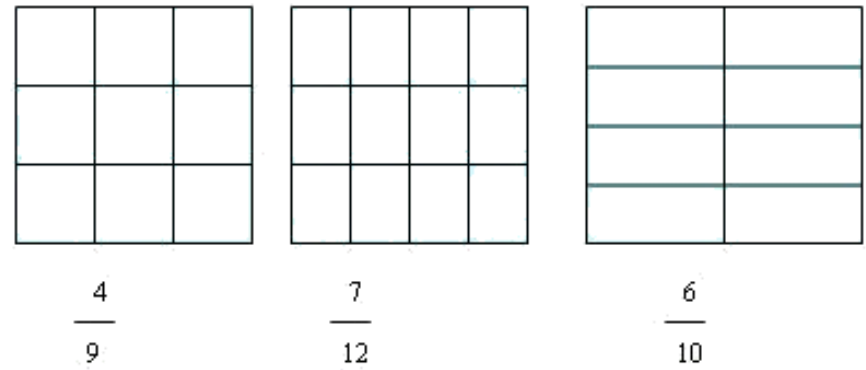
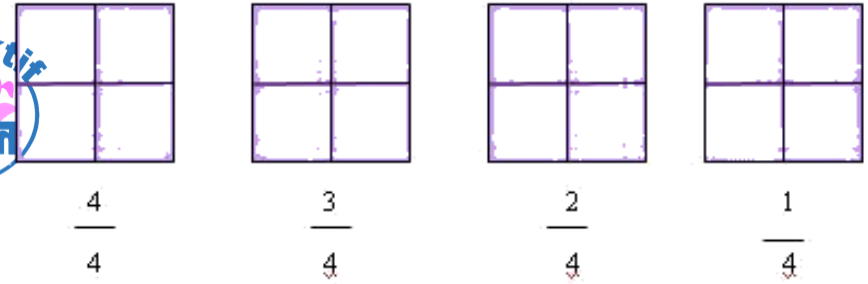
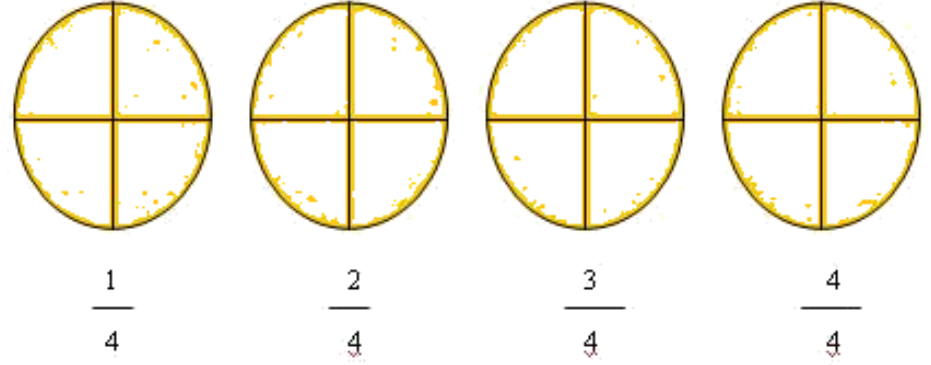


İnteraktif Eğitim
Kesirler -4-

1. Aşağıdaki şekillerde verilen kesirler kadarını boyayınız.



2. Belirtilen kesir kadarını boyayınız.

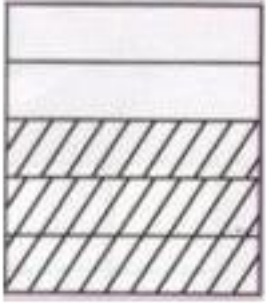


3. Aşağıdaki şekillerde taralı kısımları gösteren kesirleri yazınız.

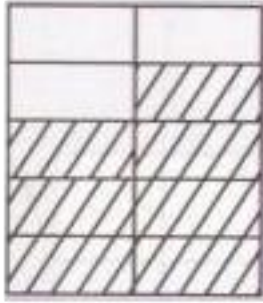




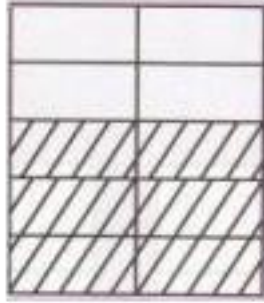




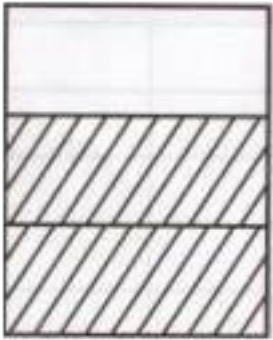
~~~~~




~~~~~



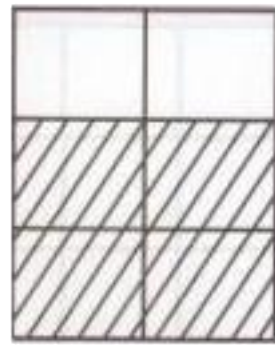
~~~~~



~~~~~



~~~~~



.....

4. Aşağıdaki soruları cevaplandıralım.

Aşağıdaki şekillerin  $\frac{1}{4}$ 'ünü boyayalım.



Aşağıdaki şekillerin  $\frac{2}{3}$ 'ünü boyayalım.




Aşağıdaki şekillerin  $\frac{3}{4}$ 'ünü boyayalım.



Aşağıdaki şekillerin  $\frac{3}{6}$ 'sini boyayalım.



Aşağıdaki şekillerin  $\frac{4}{5}$ 'ini boyayalım.



Aşağıdaki şekillerin  $\frac{6}{10}$ 'unu boyayalım.



Aşağıdaki şekillerin  $\frac{2}{8}$ 'ini boyayalım.

